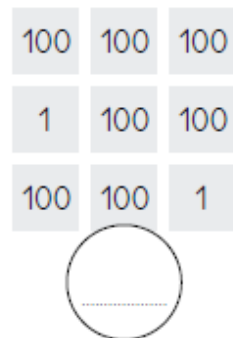
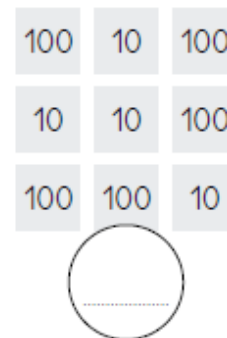
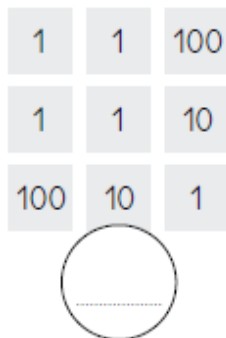
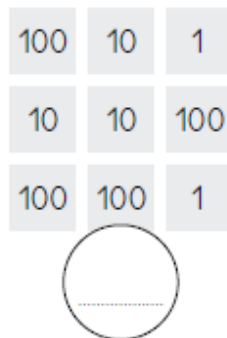


**1 -** Écris le nombre de points obtenus avec les cartes.



**2 -** Complète les cartes pour obtenir le nombre demandé.



**3 -** Calcule.

$200 + 30 + 8 = \dots\dots\dots$

$60 + 900 + 4 = \dots\dots\dots$

$800 + 9 = \dots\dots\dots$

$50 + 600 + 3 = \dots\dots\dots$

$300 + 80 + 2 = \dots\dots\dots$

$500 + 70 = \dots\dots\dots$